

ASVAB-SECTION-9^{Q&As}

ASVAB Section Nine : Assembling Objects

**Pass ASVAB ASVAB-SECTION-9 Exam with 100%
Guarantee**

Free Download Real Questions & Answers **PDF** and **VCE** file from:

<https://www.pass2lead.com/asvab-section-9.html>

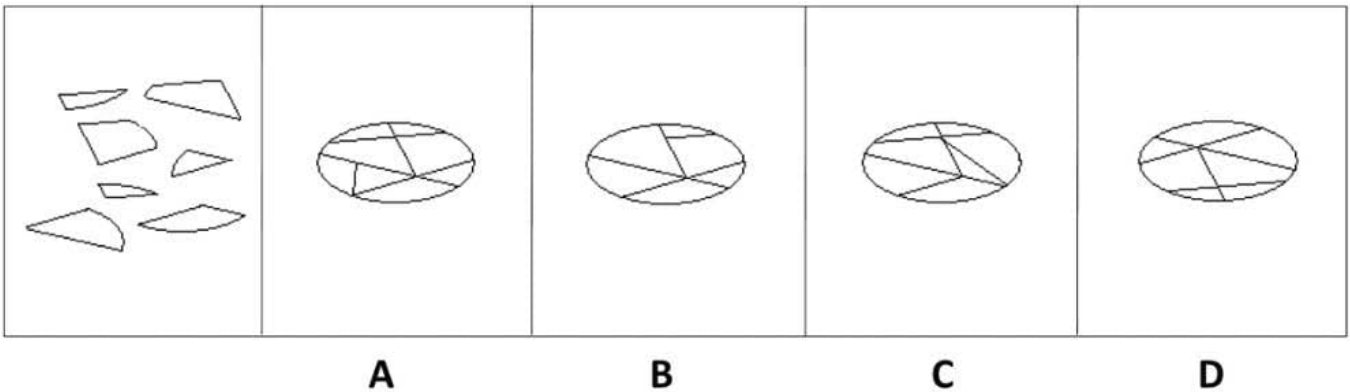
100% Passing Guarantee
100% Money Back Assurance

Following Questions and Answers are all new published by ASVAB
Official Exam Center

-  **Instant Download** After Purchase
-  **100% Money Back** Guarantee
-  **365 Days** Free Update
-  **800,000+** Satisfied Customers



QUESTION 1

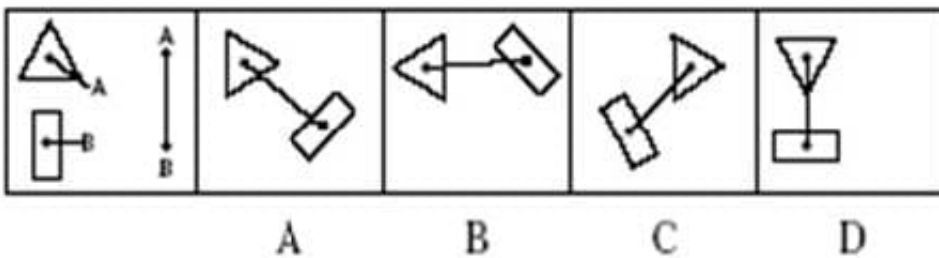


- A. Option A
- B. Option B
- C. Option C
- D. Option D

Correct Answer: D

QUESTION 2

Determine which of the choices best solves the problem shown in the first picture. The problem is presented in the first drawing and the remaining four drawings are possible solutions.

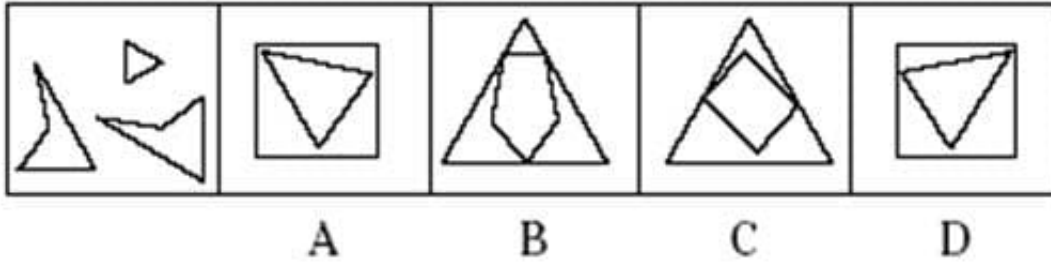


- A. Option A
- B. Option B
- C. Option C
- D. Option D

Correct Answer: C

QUESTION 3

Determine which of the choices best solves the problem shown in the first picture. The problem is presented in the first drawing and the remaining four drawings are possible solutions.

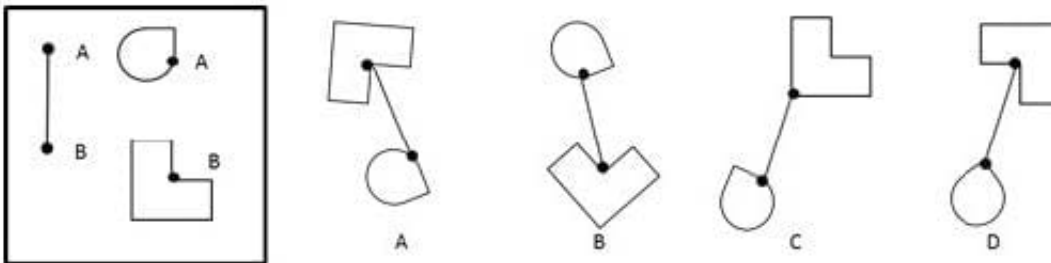


- A. Option A
- B. Option B
- C. Option C
- D. Option D

Correct Answer: B

QUESTION 4

Which figure best shows how the objects in the left box will touch if the letters for each object are matched?

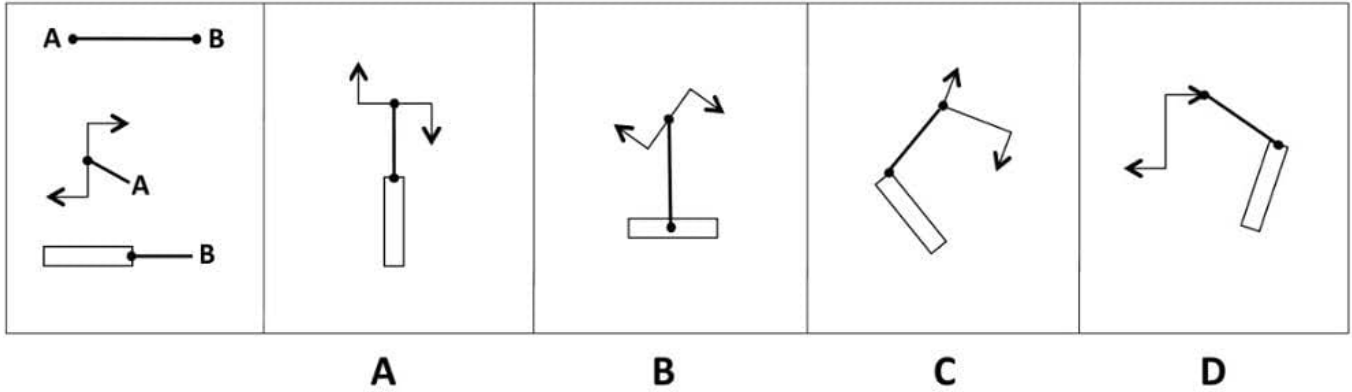


- A. Option A
- B. Option B
- C. Option C
- D. Option D

Correct Answer: B

QUESTION 5

Which of these images best solves the problem in the first picture?



A. Option A

B. Option B

C. Option C

D. Option D

Correct Answer: A

[Latest ASVAB-SECTION-9 Dumps](#)

[ASVAB-SECTION-9 VCE Dumps](#)

[ASVAB-SECTION-9 Braindumps](#)